



# GCSE Mathematics

## Unit 2: Calculator Allowed

Intermediate Tier

County Revision Paper 2a



[tinyurl.com/LARevP2a](http://tinyurl.com/LARevP2a)

Week beginning 27<sup>th</sup> March 2017

**55 Minutes**

School: \_\_\_\_\_

Student Name: \_\_\_\_\_

Question	Maximum Mark	Mark Awarded
1	4	
3	5	
5	3	
7	2	
9	6	
11	8	
13	4	
15	4	
17	4	

1. (a) Find the highest common factor of 36 and 54

[1]

.....

.....

.....

.....

(b) Use these clues to find the missing number

[3]

- This number is the product of 3 prime numbers
- 10 is a factor of this number
- 210 is a multiple of this number
- This number is greater than 30

.....

.....





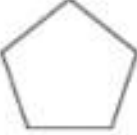


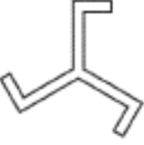







.....

.....

.....

3.

In a game, Carwyn is asked to select pairs of shapes from the cards given below.

Shape A 	Shape B 	Shape C 	Shape D 	Shape E 
Shape F 	Shape G 	Shape H 	Shape I 	Shape J 
Shape K 	Shape L 	Shape M 	Shape N 	Shape P 

He must select his shapes using given conditions.

[5]

**Condition 1:** Select a pair of shapes that have rotational symmetry of order 3.

Shape ..... and Shape .....

**Condition 2:** Select a pair of shapes that have exactly 4 lines of symmetry.

Shape ..... and Shape .....

**Condition 3:** Select a pair of shapes that are congruent.

Shape ..... and Shape .....

**Condition 4:** Select a pair of shapes that are similar but not congruent.

Shape ..... and Shape .....

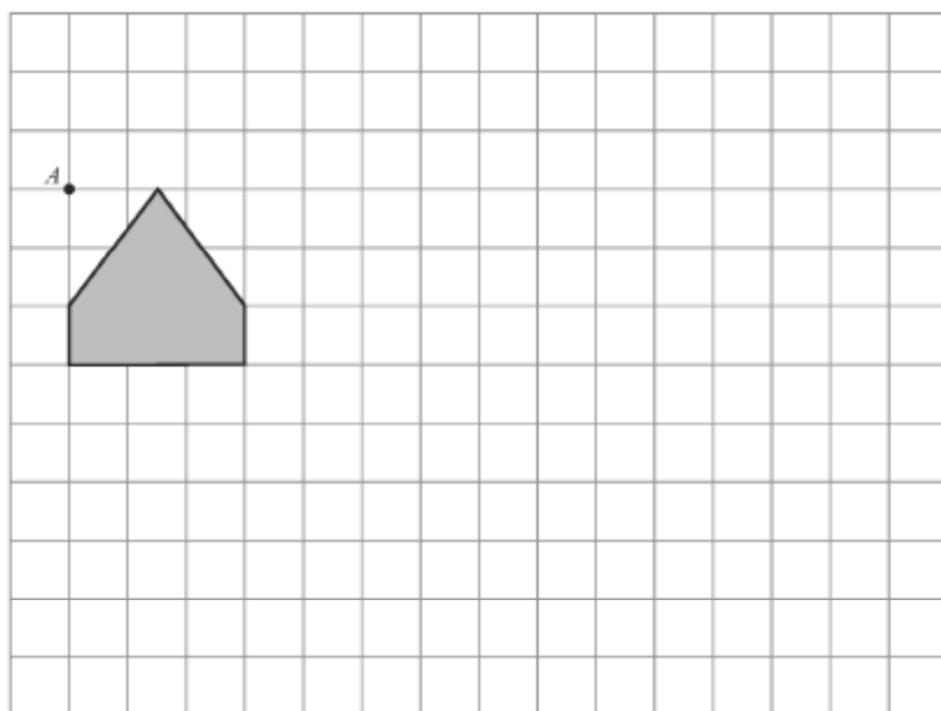
**Condition 5:** Select a pair of shapes that do not have rotational symmetry.

Shape ..... and Shape .....



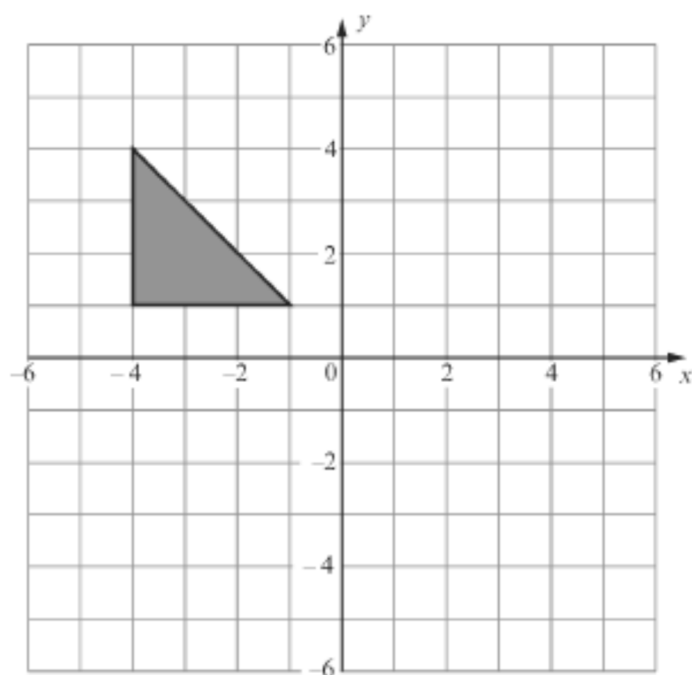


11. (a) Enlarge the shape shown on the grid by a scale factor of 2 using  $A$  as the centre of the enlargement.



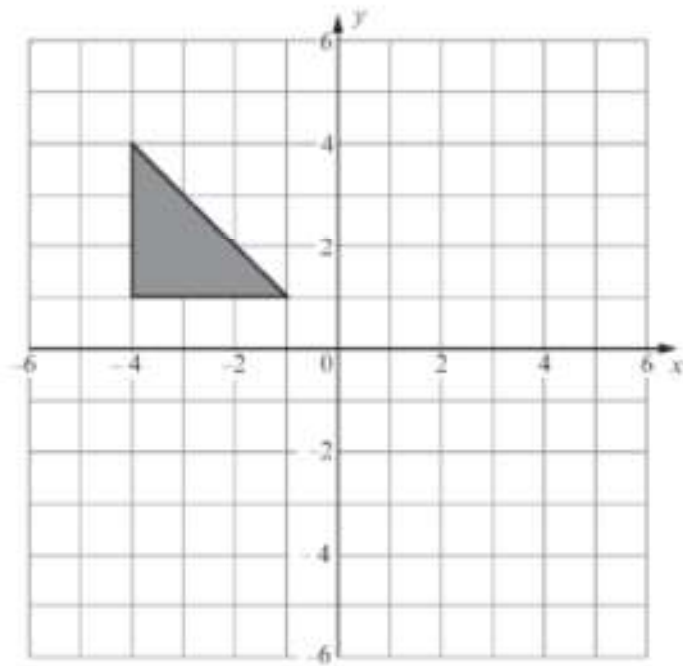
[3]

- (b) Reflect the triangle in the line  $y = x$ .



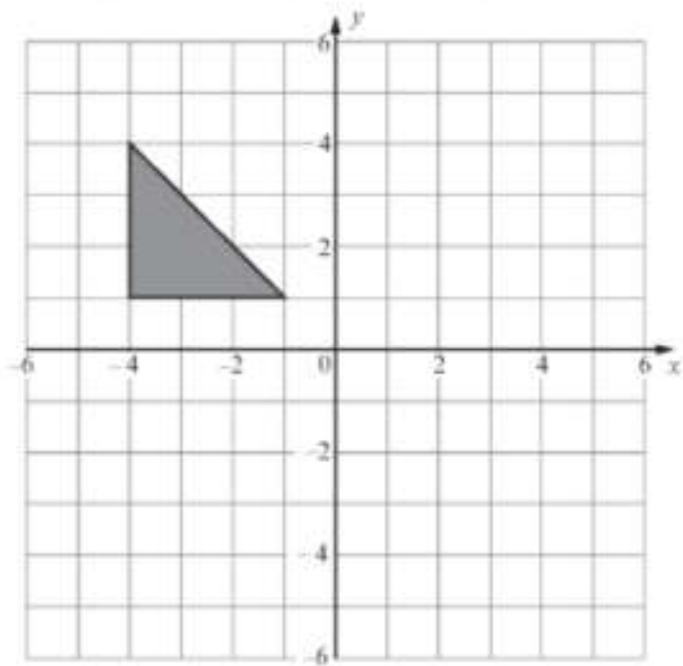
[2]

- (c) Translate the triangle shown below by  $\begin{pmatrix} 5 \\ -3 \end{pmatrix}$ .



[1]

- (d) Rotate the triangle shown on the grid below through  $90^\circ$  anticlockwise about (2, 1).



[2]





15. (a) (i) Use the graph paper below to draw the graph of  $3x + 2y = 12$ .

---

---

---

---

---

---

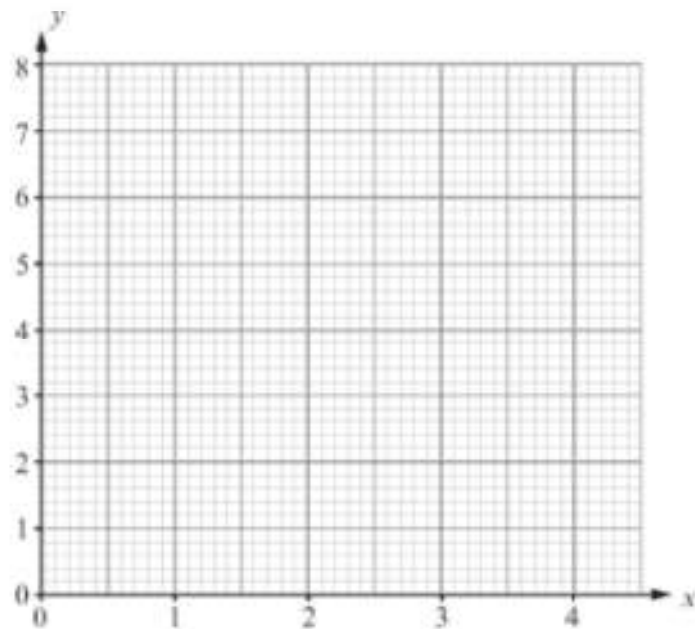
---

---

---

---

[3]

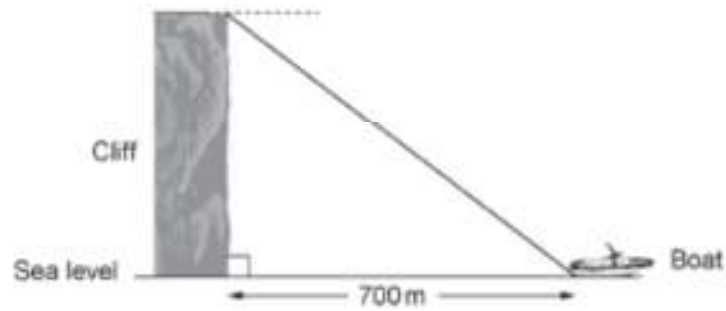


- (ii) Write down the gradient of  $3x + 2y = 12$ .

[1]

17.

From the top of a vertical cliff, the angle of depression of a sailing boat is  $15^\circ$ . If the sailing boat is 700m from the base of the cliff, calculate the height of the cliff above sea level. [4]



---

---

---

---

---