

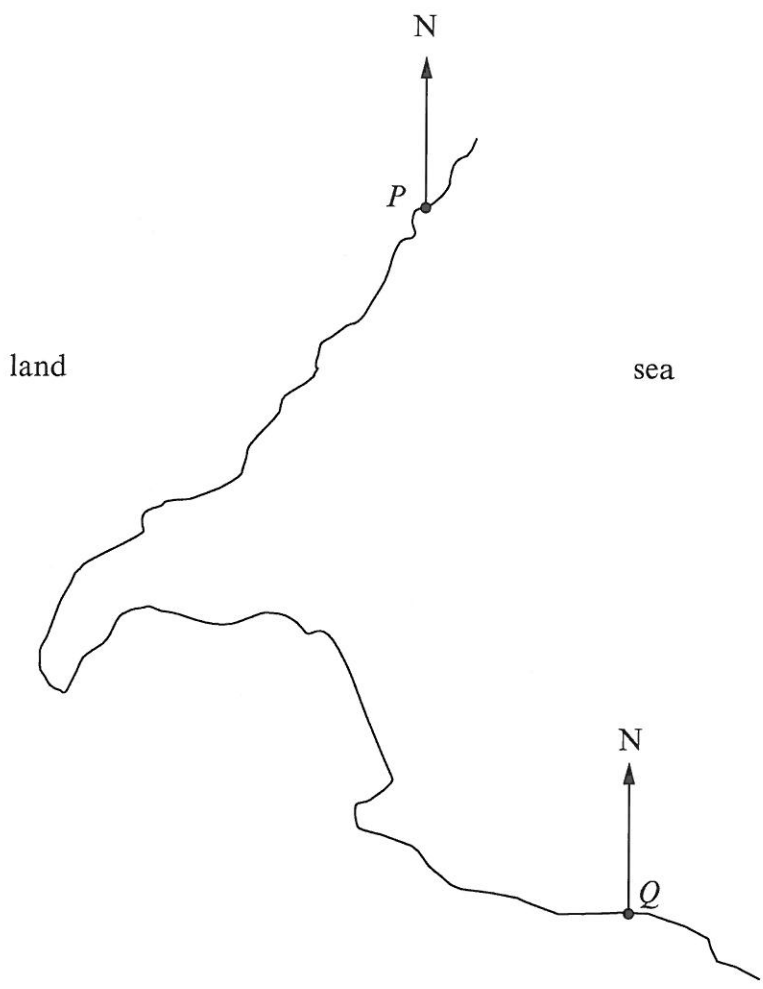
12. A ship is on a bearing of 215° from Holyhead and on a bearing of 324° from Cardigan. By drawing suitable lines, mark the position of the ship as C.

Examiner
only

[3]



11. (a) *P* and *Q* are two ports shown on a map with scale 1 cm = 8 km. Find the straight-line distance, in km, from *P* to *Q*.



.....

.....

.....

.....

[3]

- (b) A ship is on a bearing of 147° from *P* and on a bearing of 021° from *Q*. Plot the position of the ship and mark it *X*.

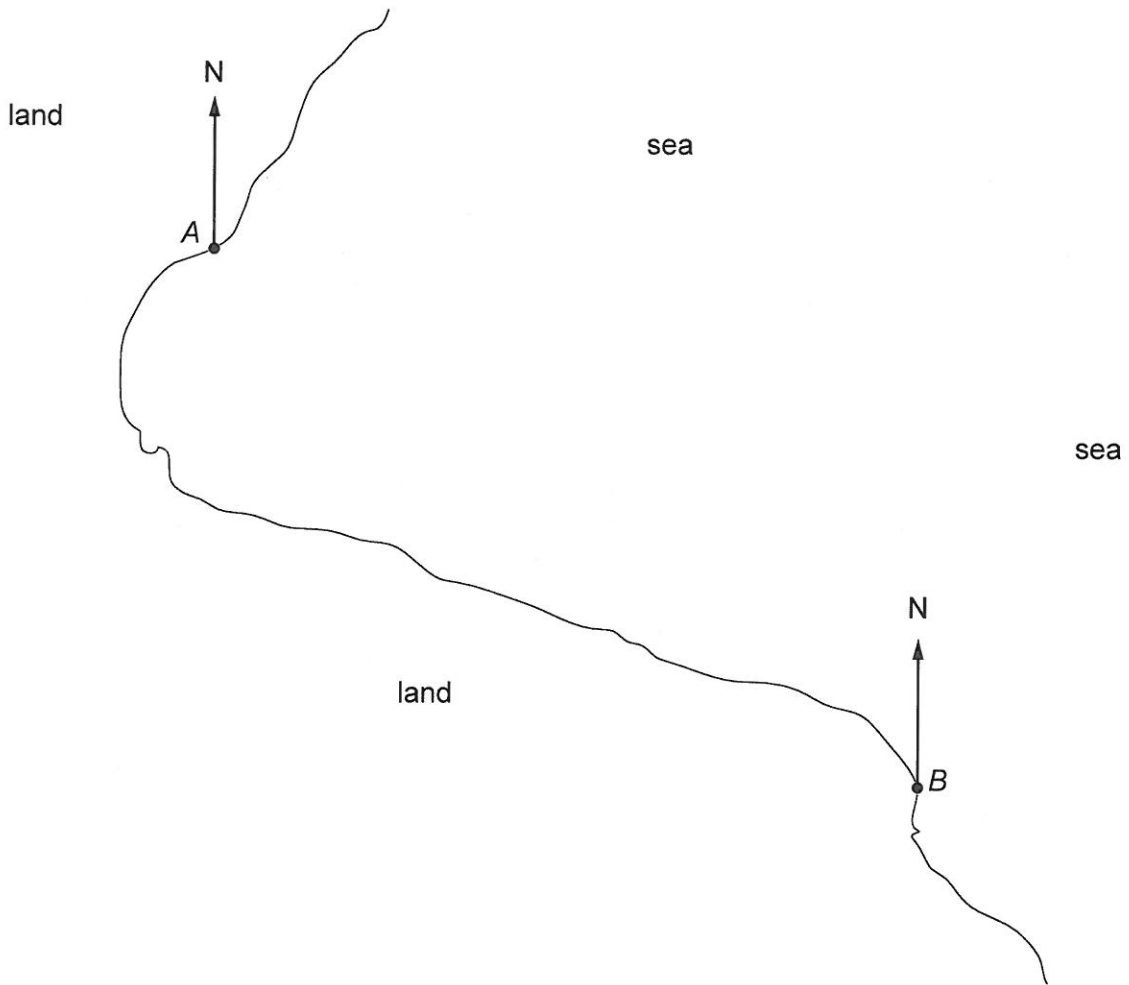
[3]



Examiner only

11. (a) *A* and *B* are two ports shown on a map with scale 1 cm = 10 km. Measure and find the straight line distance, in km, from *A* to *B*.

[3]



.....

.....

.....

.....

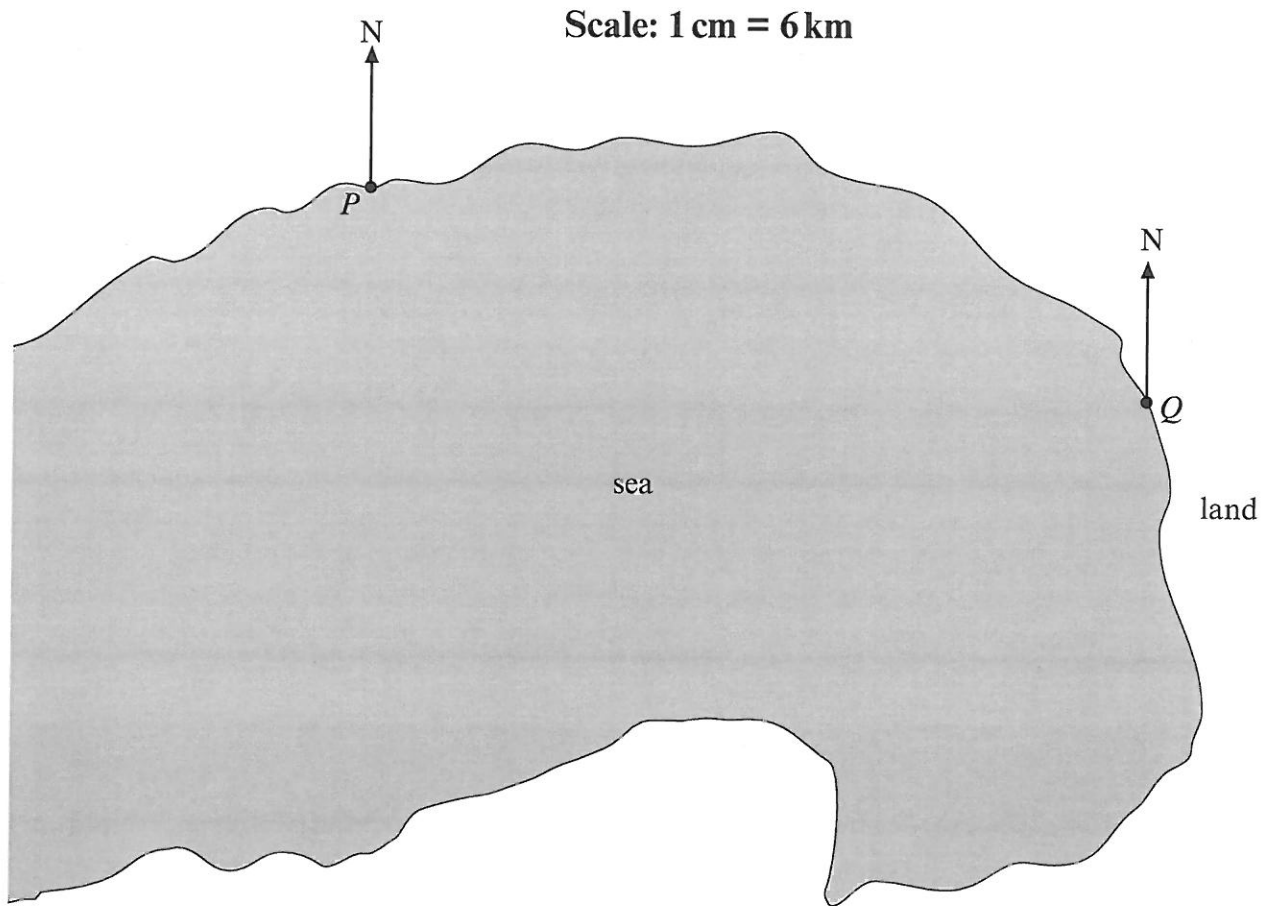
- (b) A ship is on a bearing of 097° from *A* and on a bearing of 342° from *B*. Plot the position of the ship and mark it *X*.

[3]

.....



15. (a) Two ports P and Q are shown on the map below, which is drawn to scale. Find the **actual** distance between the two ports.



.....

.....

.....

.....

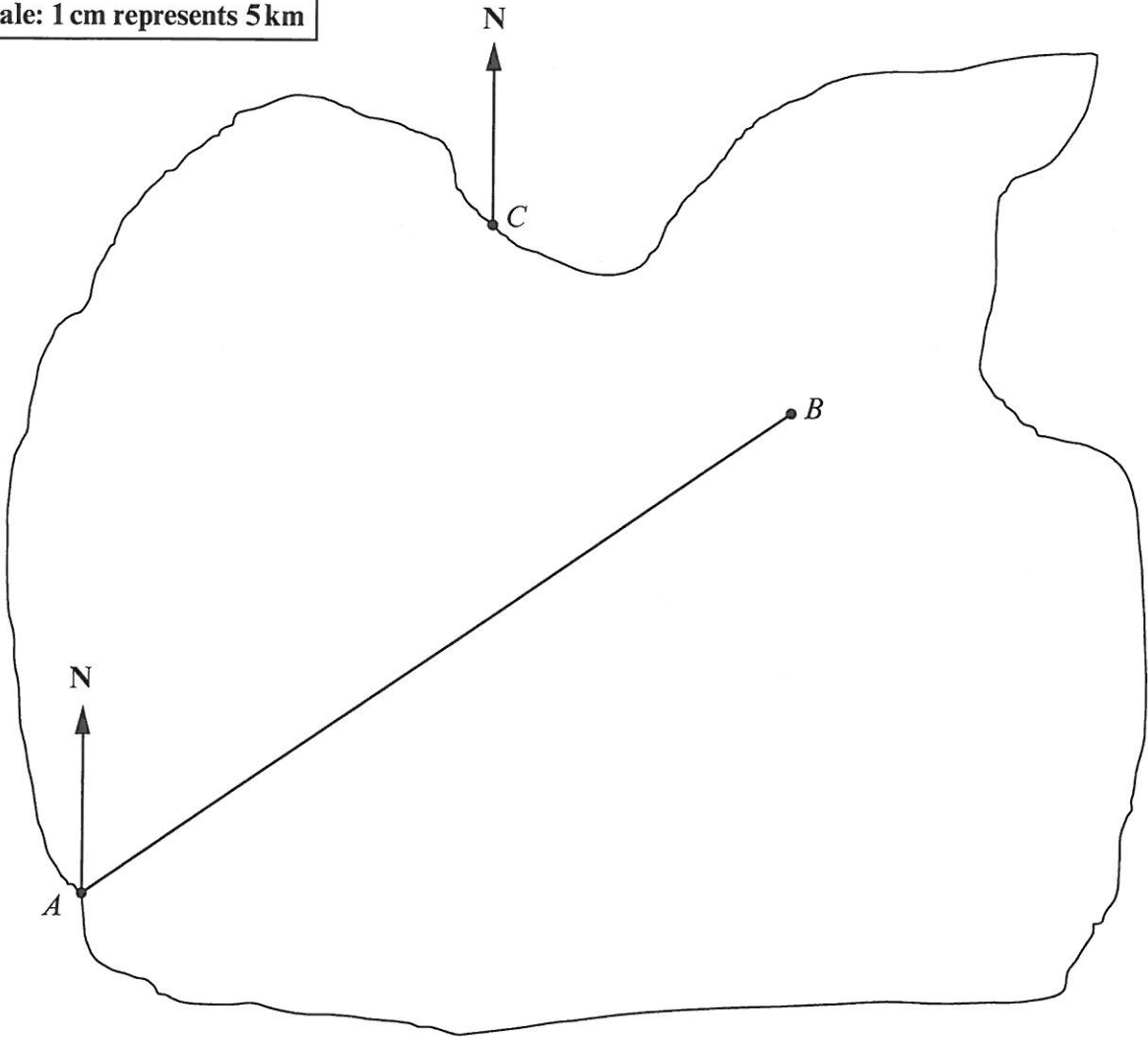
[3]

- (b) A ship is on a bearing of 152° from P and at a distance of 48 km from Q . Plot the position of the ship and mark it X .

[2]

12.

Scale: 1 cm represents 5 km



- (a) The diagram represents a map drawn to a scale of 1 cm to represent 5 km. Measure the length of AB and calculate the distance AB in kilometres.

$AB = \dots\dots\dots$ cm

.....
.....

$AB = \dots\dots\dots$ km
[3]

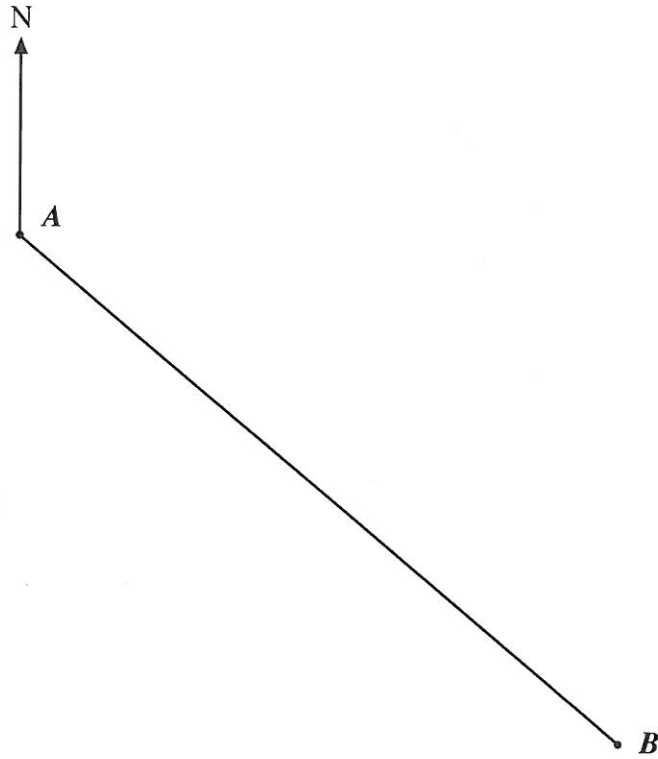
- (b) The point D is at a distance of 45 km from the point C on a bearing of 136° . Plot the point D on the above map.

.....
.....

[2]

15. (a) Below is a section of a map with scale $2 \text{ cm} = 1 \text{ km}$.
Measure and find the straight line distance, in km, from A to B .

[3]



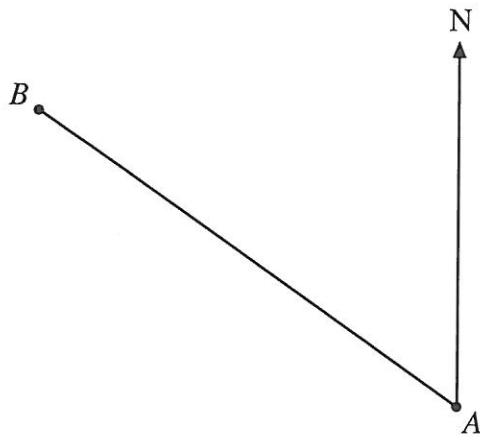
..... km

- (b) Plot the point C which is 4 km from A on a bearing of 146° .

[2]

16. (a) Below is a section of a map.

Scale: 1 cm represents 0.25 km.



Find the actual distance, in km, from A to B .

.....

.....

.....

Distance, in km, from A to B is

[3]

- (b) Plot the point C which is $2\frac{1}{2}$ km from A on a bearing of 048° .

[2]